






2 Minute Music Theory
Unit 4 Test



1. A dot equals _____.

b

2.  = ____ beats 3.  = ____ beats 4.  = ____ beats

Fill in the blanks to count the following rhythms:

 _____ _____	 _____ _____
---	---

 _____ _____	 _____ _____
--	---

Place notes or rests above the numbers to match the count for each measure:

3 4			
1 + 2 3	1	+ 3 +	1 2
+ + +	+	+ +	+ +
2		3	
		+	

Place the numbers under the notes to count the following rhythms. Don't forget the + signs:

 _____ _____	 _____ _____
---	--