

NAME: _____

Score _____/42

Music Theory Test Unit 2

Answer the following questions:




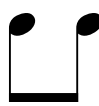

How many quarter notes = 1 whole note? 4

How many eighth notes = 1 half note? 4

How many quarter notes = 1 half notes? 2


How many half notes = 1 whole note? 2

Name the notes shown below.





    





quarter eighth half eighth whole

Draw stems and flags on the note heads below.



Draw the matching rest sign for each note shown below. Then on the bottom line tell it's duration (length).





   




Rest:    







Duration: 1 beat 1/2 beat 2 beats 4 beats

TURN OVER

Fill in the duration (beats) of each symbol below:

1.  +  +  + 
1 1 ½ ½ 1 = 4 total beats

3.  +  + 
1 2 ½ ½ = 4 total beats

2.  +  +  +  +  + 
½ ½ ½ 1 1 ½ = 4 total beats