

2 Minute Music Theory

4.3


To accomplish great things, we must not only act, but also dream; not only plan, but also believe.

Anatole France

Examples of how to place the numbers and count the new rhythms:

$\frac{4}{4}$ 

1 e + a 2 + 3
4

$\frac{4}{4}$ 


1 + 3 4 +
+ +
2




Answer the following for $\frac{4}{4}$ meter.


 = ____ beats


 = ____ beats


 = ____ beats


Fill in the blanks to count the following rhythms. Follow the above examples.

$\frac{4}{4}$ 

$\frac{4}{4}$ 

$\frac{4}{4}$ 

$\frac{4}{4}$ 

$\frac{4}{4}$ 

$\frac{4}{4}$ 