

NAME: \_\_\_\_\_

Score \_\_\_\_/22

**2 Minute Music Theory**  
**2.6**  
*Don't find fault; find a remedy.*

*Henry Ford*






Whole Rest  4 beats





Half Rest  2 beats





Quarter Rest  1 beat

Eighth Rest  1/2 beat

Using the chart above, fill in the duration (beats) of each rest below:

1.  +  +  +  +   
\_ \_ \_ \_ = \_ total beats

 +  +  +   
\_ \_ \_ \_ = \_ total beats

2.  +  +  +   
\_ \_ \_ \_ = \_ total beats

3.  +  +  +  +   
\_ \_ \_ \_ = \_ total beats