

NAME: \_\_\_\_\_









## 2 Minute Music Theory

2.5

*"I am still determined to be cheerful and happy, in whatever situation I may be; for I have also learned from experience that the greater part of our happiness or misery depends upon our dispositions, and not upon our circumstances."*

*Martha Washington*

For every kind of note (which represents the length of sound), there is a matching **rest** representing the length or duration of silence.

<u>TERM</u>	<u>NOTE</u>	<u>DURATION</u>	<u>TERM</u>	<u>REST</u>
Whole Note		4 beats	Whole Rest	
Half Note		2 beats	Half Rest	
Quarter Note		1 beat	Quarter Rest	
Eighth Note		1/2 beat	Eighth Rest	

Draw the matching rest sign for each note shown below. Write the name of each on the middle line. Then on the bottom line tell it's duration (length).



Rest: \_\_\_\_\_

Name: \_\_\_\_\_

Duration: \_\_\_\_\_